

No. of Hours Spent Watching TV	No. of Children
$\frac{1}{2}$ hour	
1 hour	
$1\frac{1}{2}$ hour	
2 hours	
More than 2 hours	

Look at the table and answer the following questions.

1. How many children watch TV for more than half an hour?
2. How many children watch TV for less than two hours?
3. The number of children who watch TV for more than two hours is _____.
4. More children watch TV for two hours than half an hour. (True/False)

Can watching TV for a long time be harmful to the eyes?



Stock-Taking in a Shop

Joseph Uncle takes stock of the play items (toys, board games, and sports items) in his store a week before the summer break. He tries to record the items in his shop using a pictograph.



How can I show these with pictures?

He notices that there are too many items of each kind in his shop and it is not easy to make a picture for every item.



Suggest some ways to him.

Dipesh, one of his helpers, suggested using one picture (icon) for every 5 items of each kind.



His pictograph is shown below.

Name of the Item	Number of Items
Toys	
Board games	
Sports items	

Dipesh used a scale while recording the items in the pictograph. A scale helps record a large number of things using fewer icons.


Now, answer the following questions based on the above pictograph.

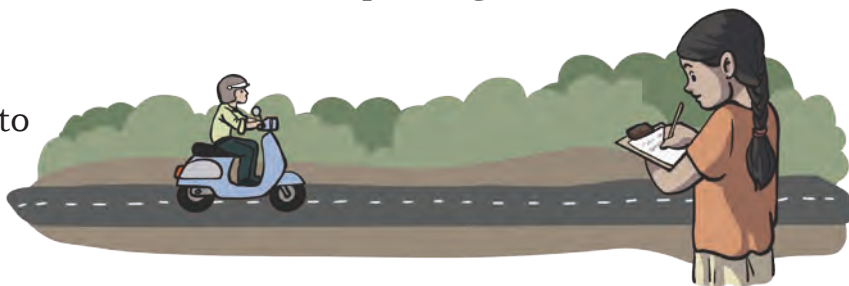
- (1) How many toys does Joseph Uncle have? _____
- (2) How many board games does Joseph Uncle have? _____
- (3) How many total play items does Joseph Uncle have? _____





Is there any other scale that you can use to make the pictograph? Choose your scale and show the same data using a pictograph in your notebook.

Two-wheelers on the Road

Deepti noted down the number of two-wheelers passing her house in one hour on three different days.

She used one icon () to show 3 two-wheelers.



Day	Number of Two-wheelers  = 3 two-wheelers
Monday	
Wednesday	
Friday	







Observe the pictograph and answer the following questions.

1. Which day had the most two-wheelers passing her house? _____
2. How many total two-wheelers did she record over three days? _____
3. How many fewer two-wheelers were seen on Wednesday than on Monday? _____
4. How many more two-wheelers were seen on Friday than on Wednesday? _____
5. Choose any other scale and represent the same data using a pictograph in your notebook.

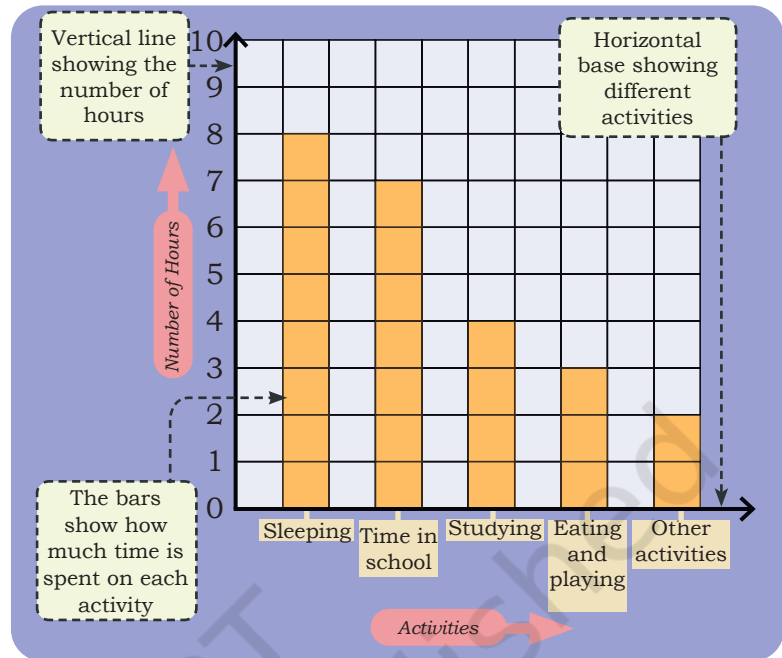

Recording a Day

One day Raman and Sheela decided to record how they spent their day.

Raman recorded his daily routine in the table below.

Activites	No. of Hours ( =1 hour)
Time spent sleeping	
Time in school	
Time spent studying	
Time spent eating and playing	
Other activities	

Sheela recorded her routine in the following manner.



How is Sheela's recording different from Raman's recording? Discuss in class. Sheela's way of recording the data is called a **bar graph**.

Observe Raman's and Sheela's routines and answer the following questions.

1. Whose daily routine shows more time spent on sleeping?

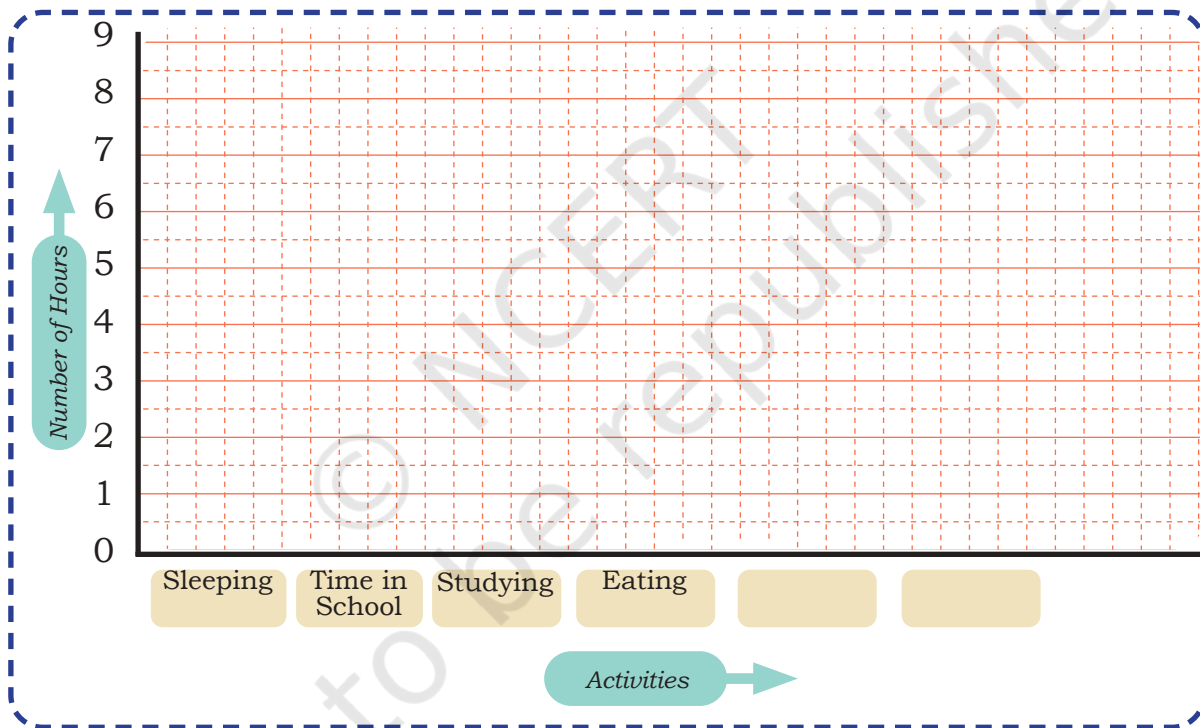
2. Who spends more hours in the school? _____
3. How many more hours does Sheela spend studying compared to Raman? _____
4. Is there any activity on which they spend the same amount of time?
If yes, name the activity _____
5. Based on their data, whose routine do you think is more balanced?
Why? _____

Day in My Life

Record your daily routine (24 hours) in hours and minutes, as necessary. Note the time spent on activities like sleeping, studying, playing, eating, and others.

Activity	No. of Hours
Sleeping	
Time in school	
Studying	
Eating	

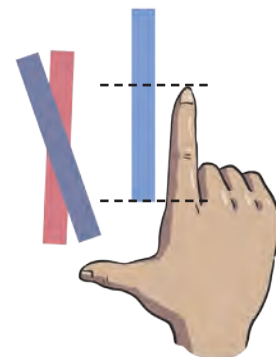
Make a bar graph of the time you spend on different activities in the space given below.



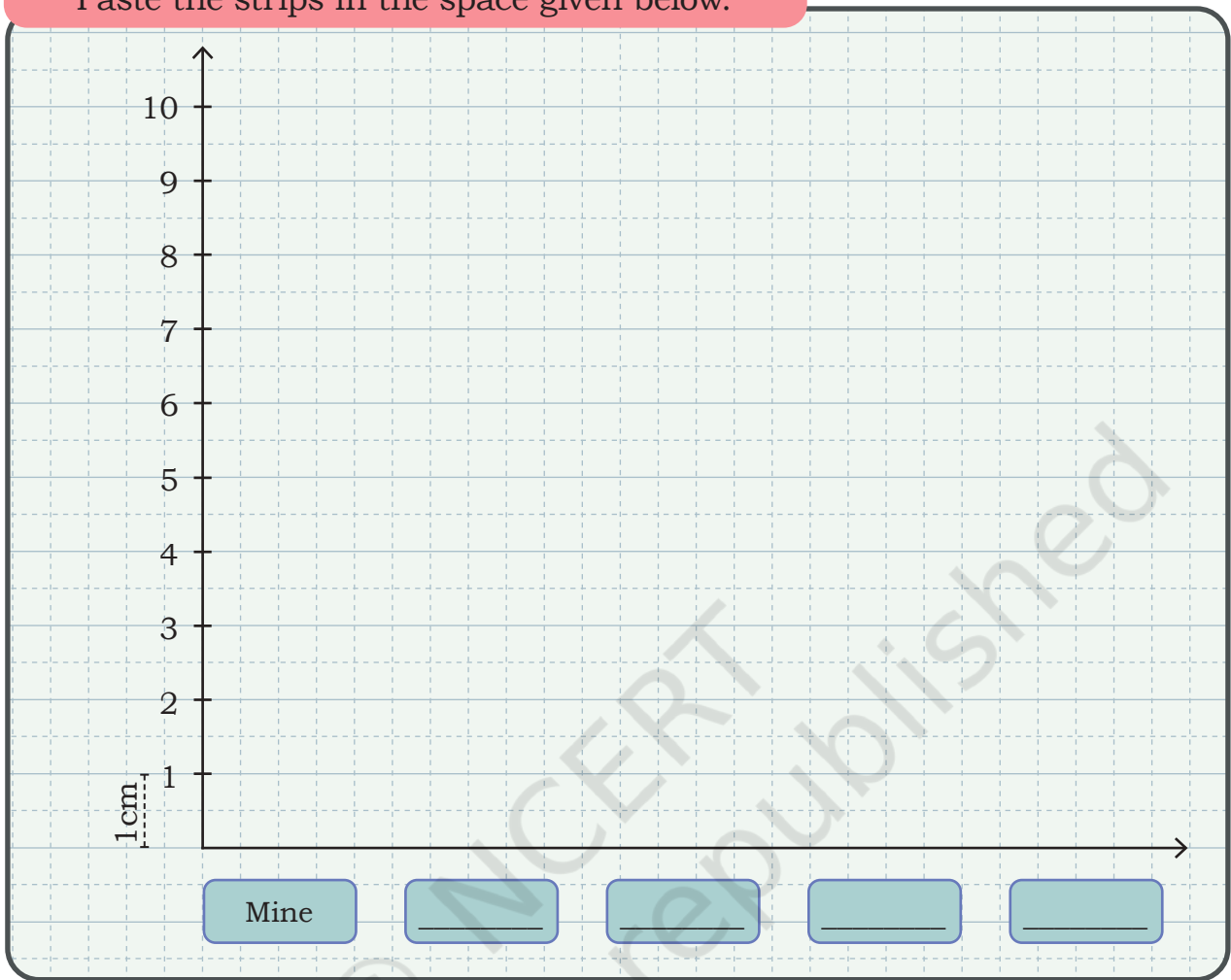
Whose Index Finger is Longer?

Cut long paper strips from waste paper. Give one strip (each of the same width) to each of your friends. Now, put the paper strip on your index finger and tear off the extra strip extending above your fingers.

Paste these paper strips along the horizontal line in the given bar graph.



Paste the strips in the space given below.



Write the answers to the following questions based on your graph.

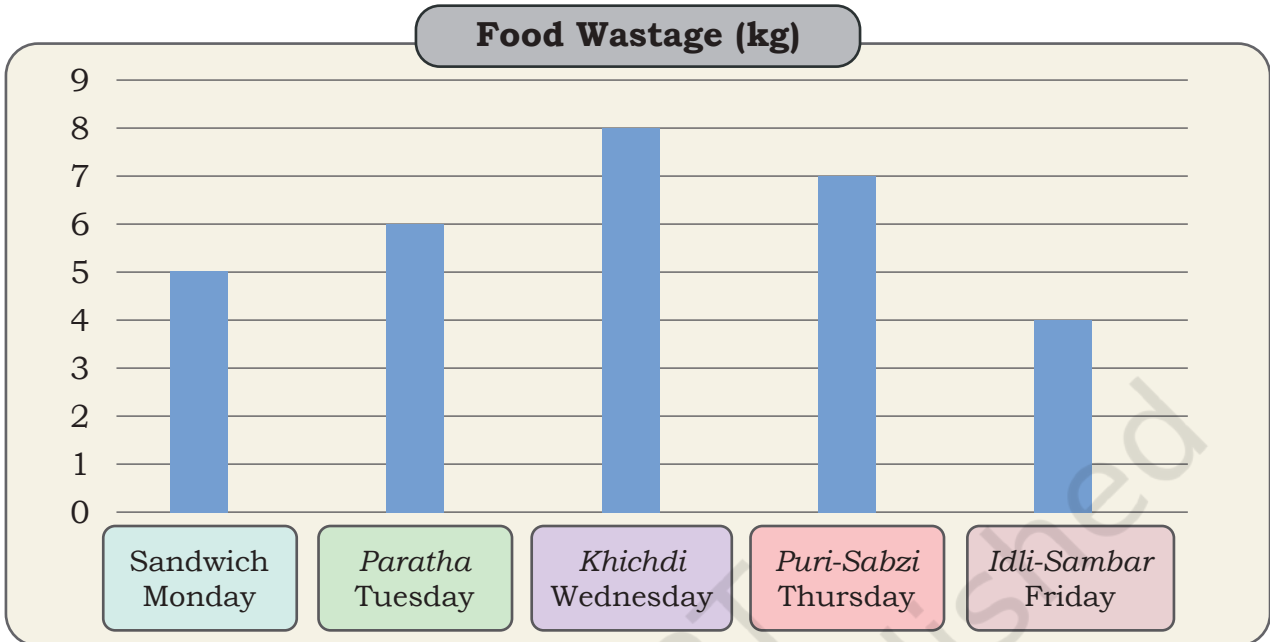
1. Whose index finger is the longest? _____ .
2. The length of the longest index finger is _____ cm.
3. The smallest index finger is _____ cm long.
4. It belongs to _____.

Food Wastage in the School Canteen

Rani stays in a residential school. Her school's dining hall displays the amount of food wasted and the number of children the food could have fed.



Given below is the data collected over the weekdays for different food items.



Rani was shocked to see the data. What do you think about food wastage? How can we reduce the wastage of food? What can we do with the leftover food?

Observe the above graph and answer the following questions.

1. Which food item had the highest amount of wastage? _____
2. Which food item had the least amount of wastage? _____
3. How much total food wastage was recorded in these days?

4. If 1 kg of food waste can feed 3 children, how many children could have been fed with the total food wasted?


5. _____ day had less food wastage than _____ day.
6. If the same food items are to be repeated next week, can you predict which food item is likely to be wasted the most?

True or False

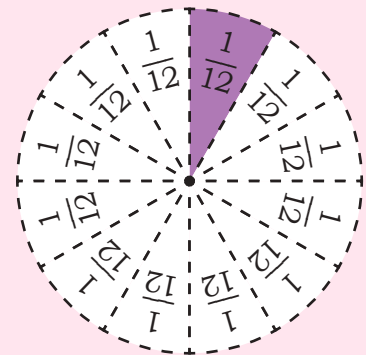
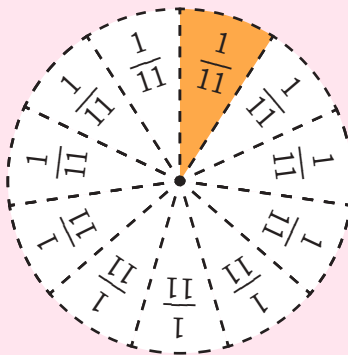
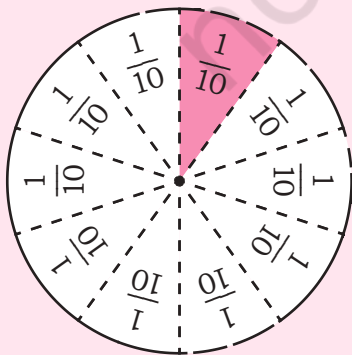
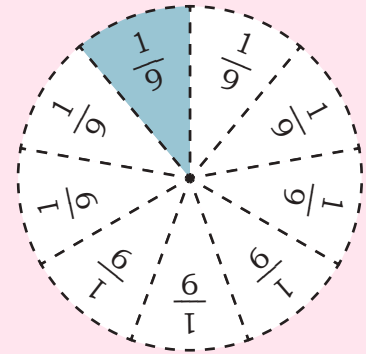
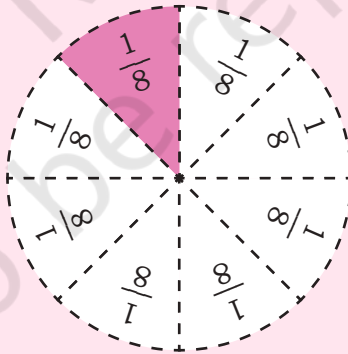
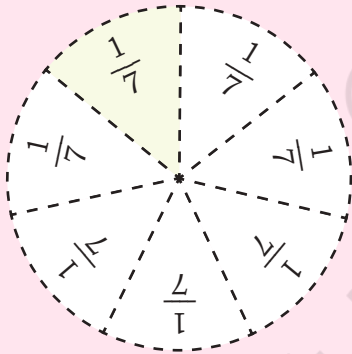
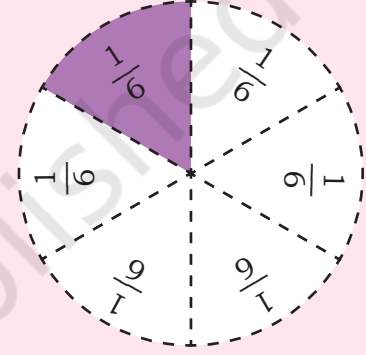
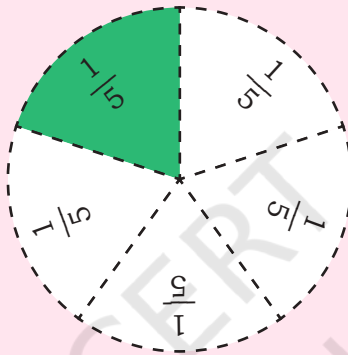
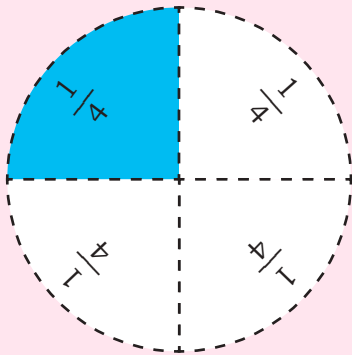
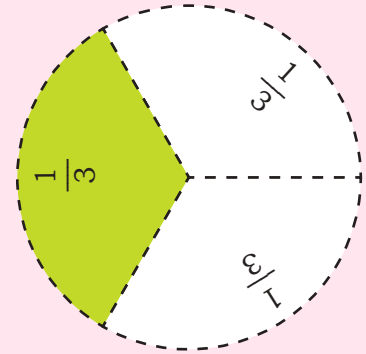
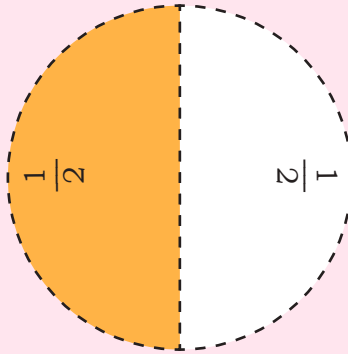



Observe the above picture carefully. Based on your observation, find out which of the following statements are true or false.

<p>All girls are wearing glasses.</p> <p><input type="checkbox"/> TRUE <input type="checkbox"/> FALSE</p>	<p>10 children are wearing caps on their heads.</p> <p><input type="checkbox"/> TRUE <input type="checkbox"/> FALSE</p>
<p>More boys are holding books than girls.</p> <p><input type="checkbox"/> TRUE <input type="checkbox"/> FALSE</p>	<p>More than half of the children are wearing glasses.</p> <p><input type="checkbox"/> TRUE <input type="checkbox"/> FALSE</p>
<p>The number of children holding books is greater than the number of children wearing caps.</p> <p><input type="checkbox"/> TRUE <input type="checkbox"/> FALSE</p>	<p>The number of boys wearing glasses is greater than the number of girls wearing glasses.</p> <p><input type="checkbox"/> TRUE <input type="checkbox"/> FALSE</p>
<p>Some children are wearing both glasses and caps.</p> <p><input type="checkbox"/> TRUE <input type="checkbox"/> FALSE</p>	<p>There is no child who has all three items—a cap, a book and a backpack.</p> <p><input type="checkbox"/> TRUE <input type="checkbox"/> FALSE</p>



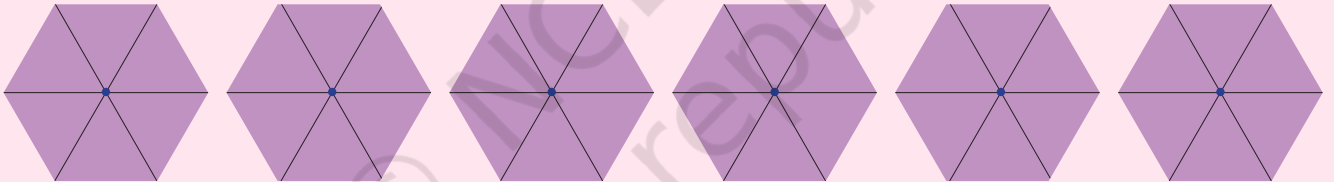
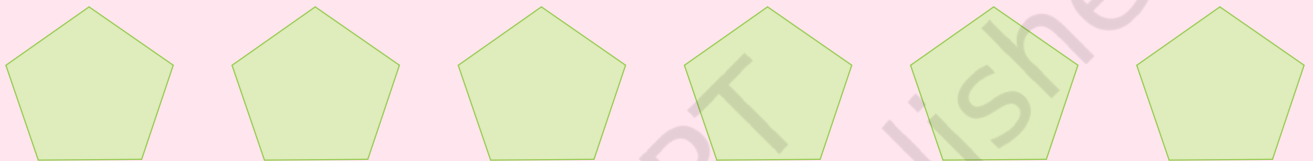

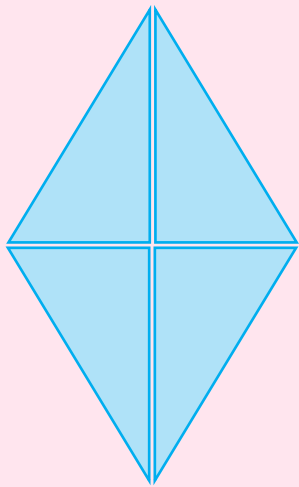
Fractions Kit



© NCERT
not to be republished



Tessellation and Shapes



© NCERT
not to be republished



Number Tokens

10,000 10,000 10,000 10,000 10,000

10,000 10,000 10,000 10,000

1,000 1,000 1,000 1,000 1,000

1,000 1,000 1,000 1,000

1,000 1,000 1,000 1,000 1,000

1,000 1,000 1,000 1,000

100 100 100 100 100

100 100 100 100 100

100 100 100 100 100

100 100 100 100 100

10 10 10 10 10 10 10

10 10 10 10 10 10 10

10 10 10 10 10 10

1 1 1 1 1 1 1 1

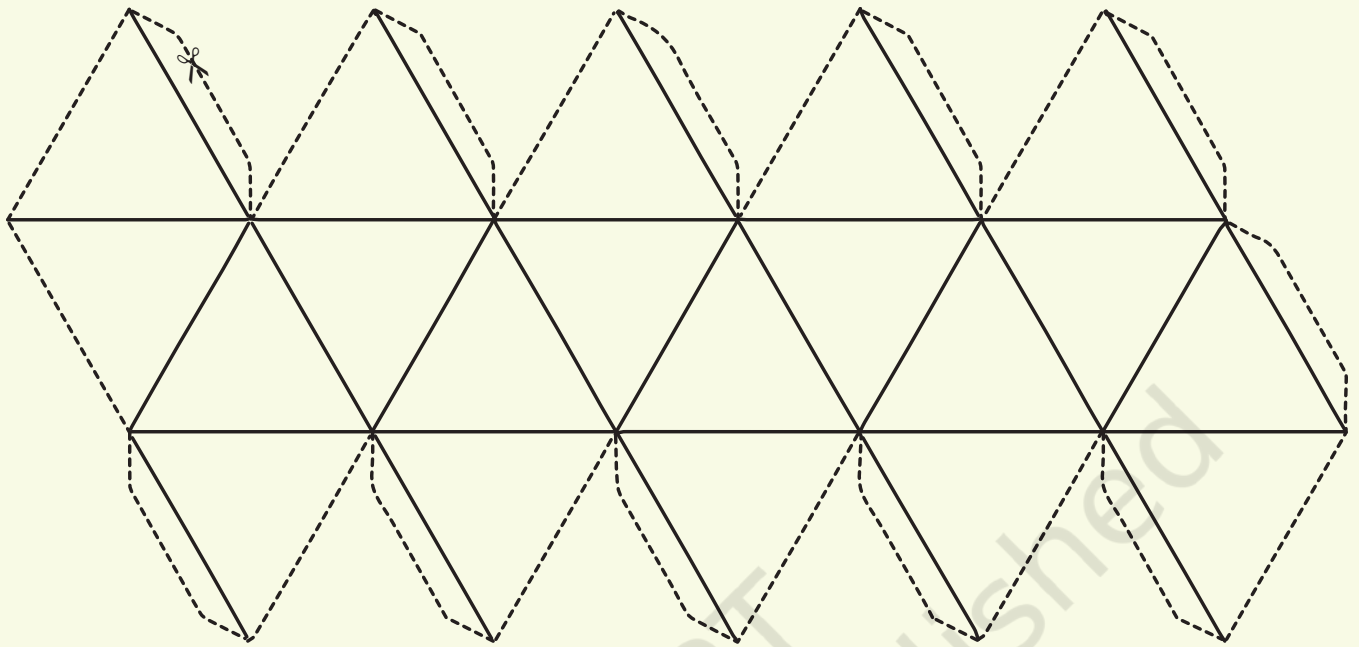
1 1 1 1 1 1 1 1

1 1 1 1

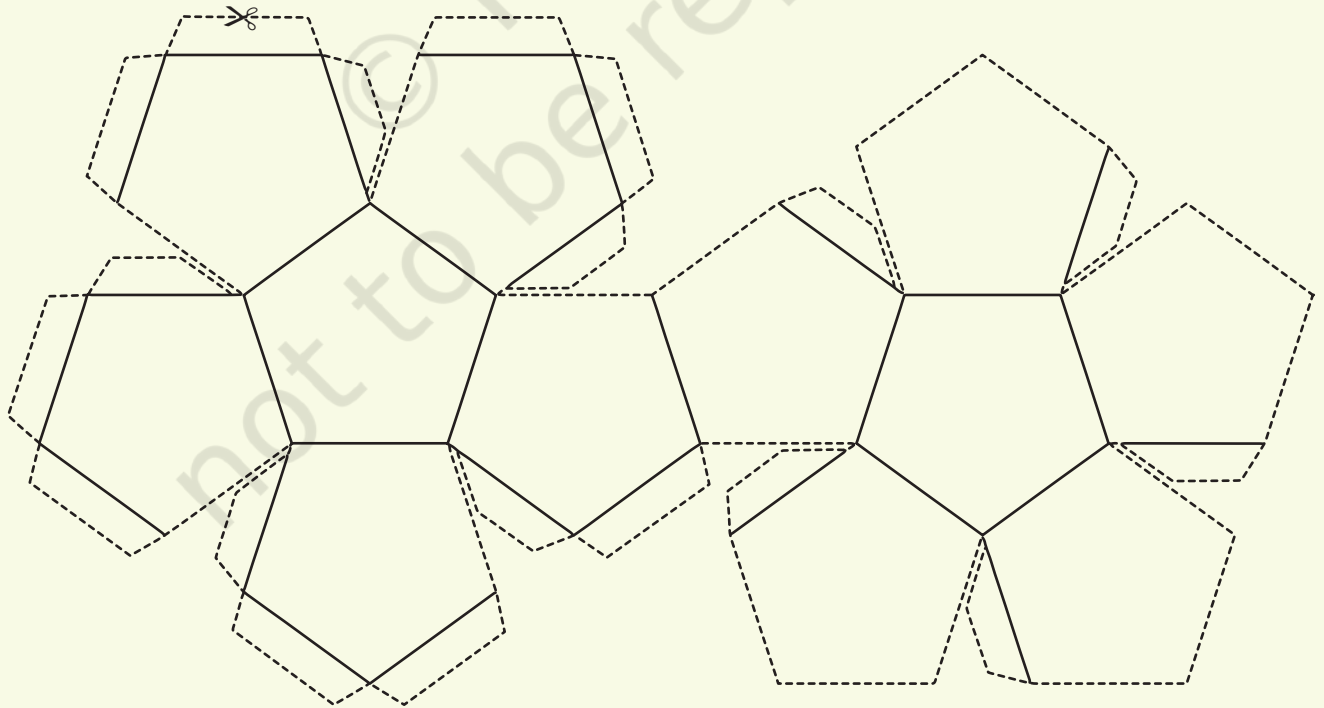
© NCERT
not to be republished



Cut along the dotted lines and fold along the solid lines



Net of a Icosahedron



Net of a Dodecahedron

© NCERT
not to be republished



